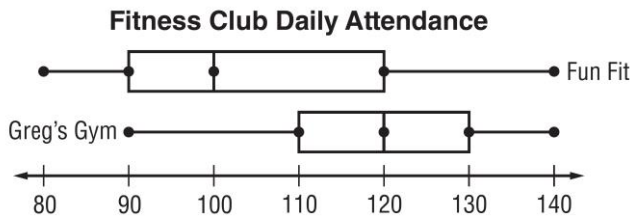


Lesson 4 Homework Practice

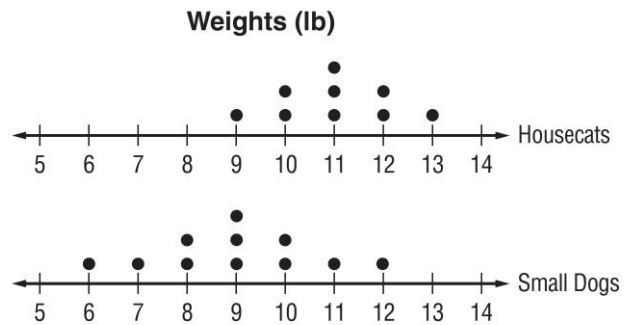
Compare Populations

Compare the centers and variations of the two populations in each exercise. Round to the nearest tenth if necessary. Write an inference you can draw about the two populations.

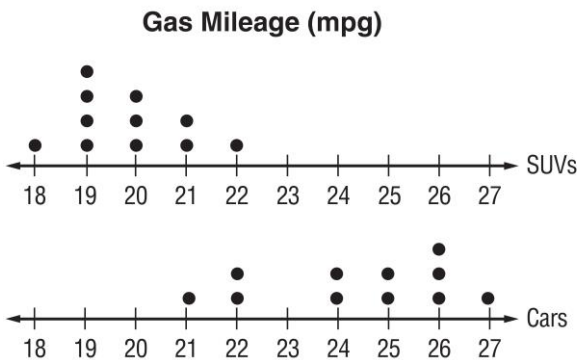
1. **FITNESS** The double plot shows the daily attendance for two fitness clubs for one month.



2. **ANIMALS** The double dot plot shows the weights in pounds of several housecats and small dogs.



3. **GAS MILEAGE** The double dot plot shows the gas mileage, in miles per gallon, for several cars and SUVs.



4. **NUTRITION** The double box plot shows the number of Calories per serving for various fruits and vegetables.

